

Convergence of Fourier Series

MATH 467 *Partial Differential Equations*

J Robert Buchanan

Department of Mathematics

Fall 2025

Objectives

In this lesson we will explore the questions:

- ▶ What are the conditions that guarantee the Fourier series of a given function $f(x)$ converges?
- ▶ If the Fourier series of a given function $f(x)$ converges, does it converge to the value of $f(x)$ at a given x ?

Short Answer to First Question

A Fourier series will converge for a large class of functions, though we will prove convergence only for the class of **piecewise smooth** functions.

Short Answer to First Question

A Fourier series will converge for a large class of functions, though we will prove convergence only for the class of **piecewise smooth** functions.

Definition

A function $f(x)$ is **piecewise continuous** on $[a, b]$ (or (a, b)) if there are finitely many points $a = x_0 < x_1 < x_2 < x_3 < \cdots < x_n = b$, such that

- ▶ $f(x)$ is continuous on (x_{i-1}, x_i) for all $i = 1, 2, \dots, n$,
- ▶ the one-sided limits $\lim_{x \rightarrow x_i^-} f(x)$ and $\lim_{x \rightarrow x_i^+} f(x)$ exist for all $i = 1, 2, \dots, n-1$, and
- ▶ the one-sided limits $\lim_{x \rightarrow a^+} f(x)$ and $\lim_{x \rightarrow b^-} f(x)$ both exist.

Remarks

- ▶ The limits mentioned in the definition of piecewise continuous must be finite, real numbers.
- ▶ Function $f(x)$ is piecewise continuous on $(-\infty, \infty)$ if it is piecewise continuous on every finite interval $[a, b]$.
- ▶ Function $f(x)$ is **piecewise smooth** on $[a, b]$ if $f'(x)$ is piecewise continuous on $[a, b]$.
- ▶ Since any piecewise continuous function is integrable, the Fourier coefficients of any piecewise continuous function are well-defined (but this is not enough to show the Fourier series converges).

Notation

For any $c \in [a, b]$, define

$$\lim_{x \rightarrow c^+} f(x) = f(c+) \quad \text{and} \quad \lim_{x \rightarrow c^-} f(x) = f(c-).$$

Function $f(x)$ is continuous at c if and only if $f(c+) = f(c-) = f(c)$.

Examples

Determine which of the following functions is piecewise smooth, piecewise continuous, or neither on $[-L, L]$ for some $L > 0$.

$$f_1(x) = \begin{cases} L & \text{if } -L \leq x < 0 \\ x & \text{if } 0 \leq x \leq L \end{cases}$$

$$f_2(x) = \begin{cases} x^2 & \text{if } -L \leq x < 0 \\ x - 1 & \text{if } 0 \leq x \leq L \end{cases}$$

$$f_3(x) = \cos \frac{1}{x}$$

$$f_4(x) = x \cos \frac{1}{x}$$

$$f_5(x) = x^{3/5}$$

$$f_6(x) = x^{6/5}$$

$$f_7(x) = \frac{1}{x}$$

Discussion (1 of 7)

$$f_1(x) = \begin{cases} L & \text{if } -L \leq x < 0 \\ x & \text{if } 0 \leq x \leq L \end{cases}$$

Function $f_1(x)$ is piecewise continuous and piecewise smooth on $[-L, L]$ with

$$f_1(-L+) = f_1(0-) = f_1(L-) = L$$

$$f_1(0+) = 0$$

$$f'_1(x) = \begin{cases} 0 & \text{if } -L < x < 0 \\ 1 & \text{if } 0 < x < L \end{cases}$$

$$f'_1(-L+) = f'_1(0-) = 0$$

$$f'_1(0+) = f'_1(L-) = 1.$$

Discussion (2 of 7)

$$f_2(x) = \begin{cases} x^2 & \text{if } -L \leq x < 0 \\ x - 1 & \text{if } 0 \leq x \leq L \end{cases}$$

Function $f_2(x)$ is piecewise continuous and piecewise smooth on $[-L, L]$ with

$$f_2(-L+) = L^2$$

$$f_2(0-) = 0$$

$$f_2(0+) = -1$$

$$f_2(L-) = L - 1$$

$$f_2'(x) = \begin{cases} 2x & \text{if } -L < x < 0 \\ 1 & \text{if } 0 < x < L \end{cases}$$

$$f_2'(-L+) = -2L$$

$$f_2'(0-) = 0$$

$$f_2'(0+) = f_2'(L-) = 1.$$

Discussion (3 of 7)

$$f_3(x) = \cos \frac{1}{x}$$

Function $f_3(x)$ is neither piecewise continuous nor piecewise smooth on $[-L, L]$ since $f_3(0-)$ does not exist.

$$f'_3(x) = \frac{1}{x^2} \sin \frac{1}{x}$$

Note that $f'_3(0-)$ does not exist.

Discussion (4 of 7)

$$f_4(x) = x \cos \frac{1}{x}$$

Function $f_4(x)$ is piecewise continuous but not piecewise smooth on $[-L, L]$.

$$f_4(-L+) = -L \cos \frac{1}{L}$$

$$f_4(0-) = f_4(0+) = 0$$

$$f_4(L-) = L \cos \frac{1}{L}$$

$$f_4'(x) = \cos \frac{1}{x} - \frac{1}{x} \sin \frac{1}{x}$$

Note that $f_4'(0-)$ does not exist.

Discussion (5 of 7)

$$f_5(x) = x^{3/5}$$

Function $f_5(x)$ is continuous but not piecewise smooth on $[-L, L]$.

$$f'_5(x) = \frac{3}{5x^{2/5}}$$

Note that $f'_5(0-)$ does not exist.

Discussion (6 of 7)

$$f_6(x) = x^{6/5}$$

Function $f_6(x)$ is continuous and piecewise smooth on $[-L, L]$.

$$f'_6(x) = \frac{6}{5}x^{1/5}$$

Discussion (7 of 7)

$$f_7(x) = \frac{1}{x}$$

Function $f_7(x)$ is neither piecewise continuous nor piecewise smooth on $[-L, L]$. Note that $f_7(0-)$ does not exist.

$$f_7'(x) = -\frac{1}{x^2}$$

Note that $f_7'(0-)$ does not exist.

Dirichlet Convergence Theorem

Theorem

Assume that $f(x)$ is a piecewise smooth function on the interval $[-L, L]$ extended to $(-\infty, \infty)$ periodically with period $2L$. Then the Fourier series of $f(x)$ converges for all x to the value

$$\frac{1}{2} (f(x+) + f(x-)) .$$

Dirichlet Convergence Theorem

Theorem

Assume that $f(x)$ is a piecewise smooth function on the interval $[-L, L]$ extended to $(-\infty, \infty)$ periodically with period $2L$. Then the Fourier series of $f(x)$ converges for all x to the value

$$\frac{1}{2} (f(x+) + f(x-)) .$$

Remarks:

- ▶ If f is continuous at $x = x_0$ then the Fourier series converges to $f(x_0)$ when $x = x_0$.
- ▶ If f has a jump or removable discontinuity at $x = x_0$, the Fourier series converges to the average of the limits of f from the left and right at $x = x_0$.

Example

Consider the piecewise-defined function

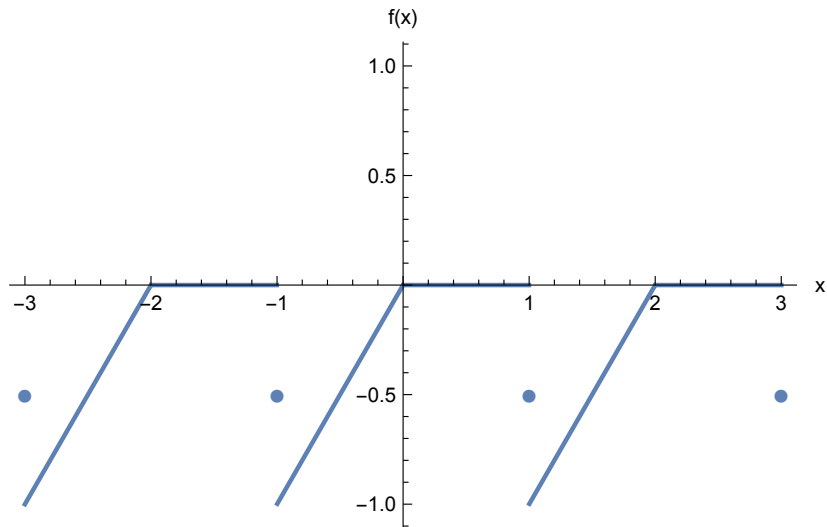
$$f(x) = \begin{cases} x & \text{if } -1 \leq x < 0, \\ 0 & \text{if } 0 \leq x < 1. \end{cases}$$

Its Fourier series representation is

$$f(x) \sim -\frac{1}{4} + \sum_{n=1}^{\infty} \frac{(-1)^{n+1}}{n\pi} \sin(n\pi x) + \sum_{n=1}^{\infty} \frac{2}{(2n-1)^2\pi^2} \cos((2n-1)\pi x).$$

Sketch the graph of the Fourier series.

Graph



Application: Finding the Sum of a Series

If an infinite series is made up of Fourier coefficients for some function, the function can be used to sum the series.

Application: Finding the Sum of a Series

If an infinite series is made up of Fourier coefficients for some function, the function can be used to sum the series.

Example

1. Find the Fourier series for $f(x) = |x|$ on $[-\pi, \pi]$.
2. Use the Fourier series and $f(x)$ to find

$$\sum_{n=1}^{\infty} \frac{1}{(2n-1)^2}.$$

Solution

Function $f(x) = |x|$ is an even function.

$$a_0 = \frac{2}{\pi} \int_0^{\pi} x \, dx = \pi$$

$$a_n = \frac{2}{\pi} \int_0^{\pi} x \cos(nx) \, dx = \begin{cases} -4/(n^2\pi) & \text{if } n \text{ is odd,} \\ 0 & \text{if } n \text{ is even.} \end{cases}$$

Fourier series:

$$|x| = \frac{\pi}{2} - \frac{4}{\pi} \sum_{n=1}^{\infty} \frac{1}{(2n-1)^2} \cos((2n-1)x)$$

$$0 = \frac{\pi}{2} - \frac{4}{\pi} \sum_{n=1}^{\infty} \frac{1}{(2n-1)^2} \cos((2n-1)(0))$$

$$\frac{\pi^2}{8} = \sum_{n=1}^{\infty} \frac{1}{(2n-1)^2}$$

Application: Finding the Sum of a Series

Consider the function $f(x) = \begin{cases} -1 & \text{if } -\pi \leq x < 0 \\ 0 & \text{if } x = 0 \\ 1 & \text{if } 0 < x \leq \pi. \end{cases}$

1. Find the Fourier series for $f(x)$ on $[-\pi, \pi]$.
2. Sketch the graph of the Fourier series for $f(x)$.
3. Use the Fourier series and $f(x)$ to find

$$\sum_{k=1}^{\infty} \frac{(-1)^k}{2k-1}.$$

Solution

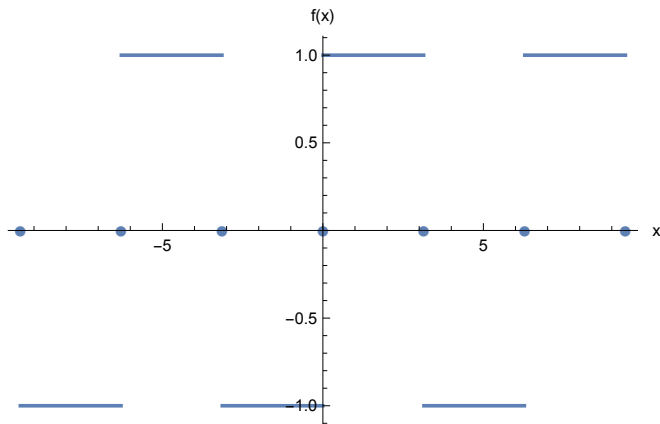
Function $f(x)$ is an odd function.

$$\begin{aligned} b_n &= \frac{1}{\pi} \int_{-\pi}^{\pi} f(x) \sin(nx) dx \\ &= \frac{-1}{\pi} \int_{-\pi}^0 \sin(nx) dx + \frac{1}{\pi} \int_0^{\pi} \sin(nx) dx \\ &= \frac{2}{\pi} \int_0^{\pi} \sin(nx) dx \\ &= \frac{2}{n\pi} (1 - \cos(n\pi)) \\ &= \begin{cases} 4/(n\pi) & \text{if } n \text{ is odd,} \\ 0 & \text{if } n \text{ is even.} \end{cases} \end{aligned}$$

Fourier series:

$$f(x) = \frac{4}{\pi} \sum_{n=1}^{\infty} \frac{1}{2n-1} \sin((2n-1)x).$$

Graph



Question: why does the Fourier series converge to $f(x)$ on $(-\pi, \pi)$?

Summing the Series

Let $x = \pi/2$.

$$f(x) = \frac{4}{\pi} \sum_{n=1}^{\infty} \frac{1}{2n-1} \sin((2n-1)x)$$

Summing the Series

Let $x = \pi/2$.

$$f(x) = \frac{4}{\pi} \sum_{n=1}^{\infty} \frac{1}{2n-1} \sin((2n-1)x)$$

$$1 = \frac{4}{\pi} \sum_{n=1}^{\infty} \frac{1}{2n-1} \sin\left((2n-1)\frac{\pi}{2}\right)$$

Summing the Series

Let $x = \pi/2$.

$$f(x) = \frac{4}{\pi} \sum_{n=1}^{\infty} \frac{1}{2n-1} \sin((2n-1)x)$$

$$1 = \frac{4}{\pi} \sum_{n=1}^{\infty} \frac{1}{2n-1} \sin\left((2n-1)\frac{\pi}{2}\right)$$

$$\frac{\pi}{4} = \sum_{n=1}^{\infty} \frac{(-1)^{n-1}}{2n-1}$$

$$-\frac{\pi}{4} = \sum_{n=1}^{\infty} \frac{(-1)^n}{2n-1}$$

Pointwise vs. Uniform Convergence

Definition

Suppose $\{f_n\}_{n=1}^{\infty}$ is a sequence of functions defined on domain D and the sequence of values $\{f_n(x)\}_{n=1}^{\infty}$ converges for each $x \in S \subset D$. Then $\{f_n\}_{n=1}^{\infty}$ is said to **converge pointwise on S to f** defined by

$$f(x) = \lim_{n \rightarrow \infty} f_n(x) \quad \text{for } x \in S.$$

While the Fourier series converges **pointwise** to $f(x)$ it does not converge **uniformly** to $f(x)$.

Uniform Convergence

Definition

A sequence of functions $\{f_n\}_{n=1}^{\infty}$ defined on domain D **converges uniformly to f on D** provided there exists a sequence of positive real numbers $\{\epsilon_n\}_{n=1}^{\infty}$ for which $\lim_{n \rightarrow \infty} \epsilon_n = 0$ and

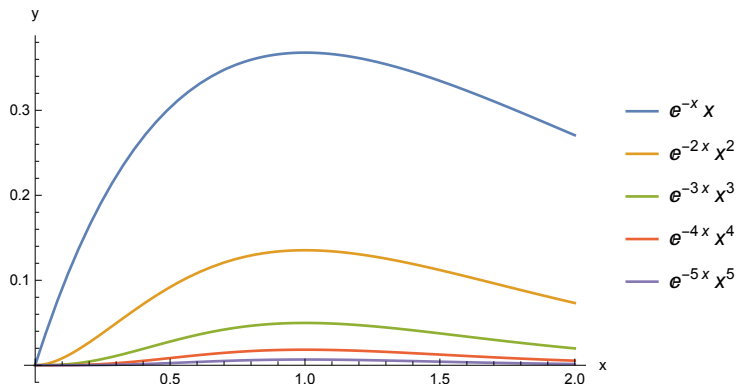
$$|f_n(x) - f(x)| < \epsilon_n$$

for all $n \in \mathbb{N}$ and for all $x \in D$.

Remark: an infinite series converges uniformly if its sequence of partial sums converges uniformly.

Illustration

Sequence $\{x^n e^{-nx}\}_{n=1}^{\infty}$ converges uniformly to $f(x) = 0$ on $D = [0, \infty)$.



Justification

- ▶ Let $f_n(x) = x^n e^{-nx}$ for $n \in \mathbb{N}$ and $x \geq 0$.
- ▶ By l'Hôpital's Rule $\lim_{n \rightarrow \infty} f_n(x) = \lim_{n \rightarrow \infty} \frac{x^n}{e^{nx}} = 0$ for all $x \geq 0$, thus $f_n(x) \rightarrow 0$ pointwise for all $x \geq 0$. Define $f(x) = 0$.
- ▶ The First Derivative Test shows that $0 \leq f_n(x) \leq f_n(1) = e^{-n}$ for all $x \geq 0$, so let $\epsilon_n = e^{-n}$ and note that $\lim_{n \rightarrow \infty} \epsilon_n = 0$.
- ▶ The sequence of functions $f_n(x) \rightarrow f(x)$ uniformly for $x \geq 0$ since $|f_n(x) - f(0)| = f_n(x) \leq \epsilon_n$ for all $n \in \mathbb{N}$.

Examples (1 of 3)

Sequence $\{x^n\}_{n=1}^{\infty}$ converges pointwise on $[0, 1]$ to

$$f(x) = \begin{cases} 0 & \text{if } 0 \leq x < 1 \\ 1 & \text{if } x = 1 \end{cases} \quad \text{but does not converge uniformly.}$$

Justification

- ▶ Let $x \in [0, 1)$ then $\lim_{n \rightarrow \infty} x^n = 0$. Also, $\lim_{n \rightarrow \infty} 1^n = 1$, so $x^n \rightarrow f(x)$ pointwise for $0 \leq x \leq 1$.
- ▶ Let $\{\epsilon_n\}_{n=1}^{\infty}$ be any sequence of positive real numbers such that $\lim_{n \rightarrow \infty} \epsilon_n = 0$. Without loss of generality assume $0 < \epsilon_n < 1$ for all $n \in \mathbb{N}$.
- ▶ Note that $0 < 1 - \epsilon_n < 1$ for all $n \in \mathbb{N}$ and thus $0 < (1 - \epsilon_n)^{1/n} < 1$ as well. Therefore for all $n \in \mathbb{N}$ there exists x_n such that $(1 - \epsilon_n)^{1/n} < x_n < 1$.
- ▶ Consider $x_n^n > 1 - \epsilon_n > 0$ and thus $x_n^n \not\rightarrow 0$ as $n \rightarrow \infty$ and the convergence is not uniform.

Examples (2 of 3)

The sequence $\{x^n\}_{n=1}^{\infty}$ converges uniformly to $f(x) = 0$ on $[0, b]$ for any $0 < b < 1$.

Justification

- ▶ As in the previous example $x^n \rightarrow 0$ pointwise for all $0 \leq x \leq b < 1$.
- ▶ Define $\epsilon_n = b^n$ for all $n \in \mathbb{N}$, then $\lim_{n \rightarrow \infty} \epsilon_n = 0$.
- ▶ Note that $x^n \leq b^n$ for all $0 \leq x \leq b$, or equivalently, $|x^n - 0| \leq \epsilon_n$ for all $0 \leq x \leq b$. Hence the convergence is uniform.

Examples (3 of 3)

The infinite series $\sum_{n=1}^{\infty} x^n$ converges pointwise on $(-1, 1)$ to

$$f(x) = \frac{x}{1-x} \text{ but not uniformly.}$$

Justification

- ▶ The N th partial sum of the series is

$$f_N(x) = x + x^2 + \cdots + x^N = \frac{1 - x^{N+1}}{1 - x} - 1.$$

- ▶ For any $-1 < x < 1$,

$$\lim_{N \rightarrow \infty} f_N(x) = \lim_{N \rightarrow \infty} \left[\frac{1 - x^{N+1}}{1 - x} - 1 \right] = \frac{1}{1 - x} - 1 = \frac{x}{1 - x} = f(x),$$

(this proves pointwise convergence).

Justification

- ▶ The N th partial sum of the series is

$$f_N(x) = x + x^2 + \cdots + x^N = \frac{1 - x^{N+1}}{1 - x} - 1.$$

- ▶ For any $-1 < x < 1$,

$$\lim_{N \rightarrow \infty} f_N(x) = \lim_{N \rightarrow \infty} \left[\frac{1 - x^{N+1}}{1 - x} - 1 \right] = \frac{1}{1 - x} - 1 = \frac{x}{1 - x} = f(x),$$

(this proves pointwise convergence).

- ▶ Consider

$$\begin{aligned} \lim_{x \rightarrow 1^-} |f_N(x) - f(x)| &= \lim_{x \rightarrow 1^-} \left| \frac{1 - x^{N+1}}{1 - x} - 1 - \frac{x}{1 - x} \right| \\ &= \lim_{x \rightarrow 1^-} \frac{x^{N+1}}{1 - x} = \infty, \end{aligned}$$

so the convergence is not uniform.

Properties Preserved by Uniform Convergence

Suppose the series $\sum_{n=1}^{\infty} u_n(x)$ converges uniformly to its sum $u(x)$ on $[a, b]$.

- ▶ If for each n , $u_n(x)$ is continuous on $[a, b]$, then the sum $u(x)$ is continuous on $[a, b]$.
- ▶ If for each n , $u_n(x)$ is integrable on $[a, b]$, then the sum $u(x)$ is integrable on $[a, b]$, and

$$\int_a^b u(x) dx = \int_a^b \left(\sum_{n=1}^{\infty} u_n(x) \right) dx = \sum_{n=1}^{\infty} \int_a^b u_n(x) dx.$$

- ▶ If for each n , $u'_n(x)$ exists and $\sum_{n=1}^{\infty} u'_n(x)$ converges uniformly on $[a, b]$, then the sum $u(x)$ is differentiable on $[a, b]$ and the derivative can be obtained by differentiating the series term by term,

$$u'(x) = \left(\sum_{n=1}^{\infty} u_n(x) \right)' = \sum_{n=1}^{\infty} u'_n(x) \quad \text{for all } x \in [a, b].$$

Weierstrass M -Test

The following theorem provides a convenient means of determining whether an infinite series converges uniformly.

Theorem

Let $\sum_{n=1}^{\infty} u_n(x)$ be a series of functions defined on an interval $[a, b]$ and suppose that for each n there is a non-negative number M_n such that $|u_n(x)| \leq M_n$ for all $x \in [a, b]$ and $\sum_{n=1}^{\infty} M_n$ converges, then

$\sum_{n=1}^{\infty} u_n(x)$ converges uniformly on $[a, b]$.

Example

Show that $\sum_{n=1}^{\infty} \frac{1}{n^2} \cos(nx)$ converges uniformly on $(-\infty, \infty)$.

Example

Show that $\sum_{n=1}^{\infty} \frac{1}{n^2} \cos(nx)$ converges uniformly on $(-\infty, \infty)$.

Since $\frac{1}{n^2} |\cos(nx)| \leq \frac{1}{n^2}$ for all $x \in \mathbb{R}$ and

$$\sum_{n=1}^{\infty} \frac{1}{n^2}$$

converges, then the series converges uniformly for all $x \in \mathbb{R}$.